



# Lecture (04) Electric Flux and Gauss's Law

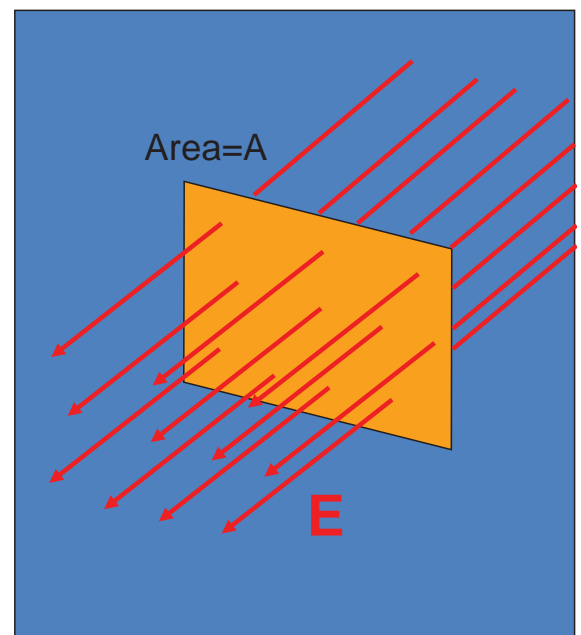
By:

**Dr. Ahmed ElShafee**

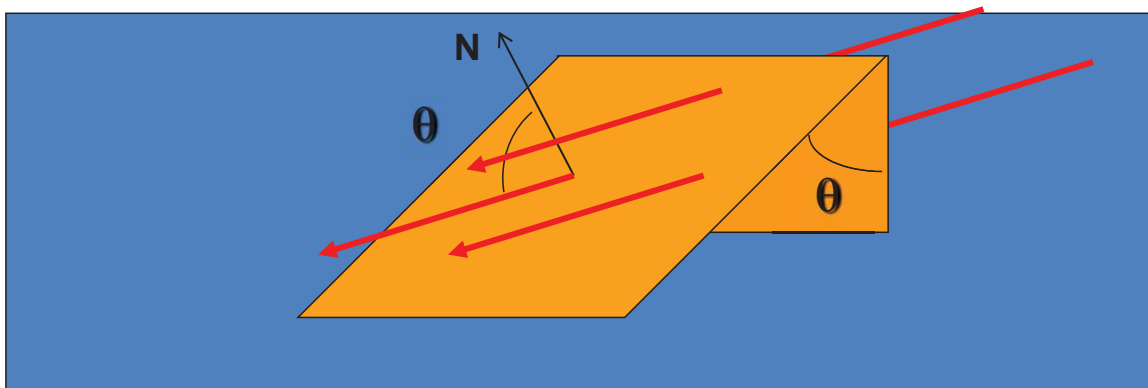
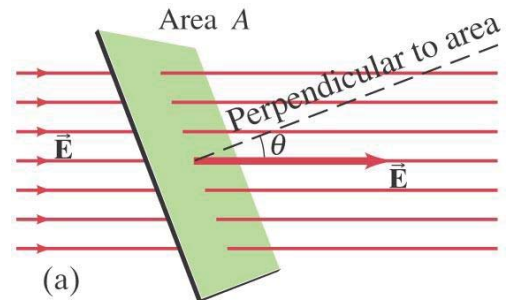
Dr. Ahmed ElShafee, ACU : Spring 2015, Physics II

## Electric Flux

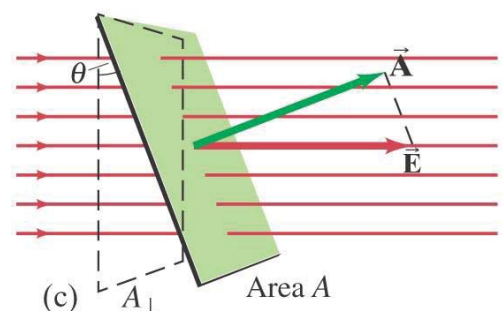
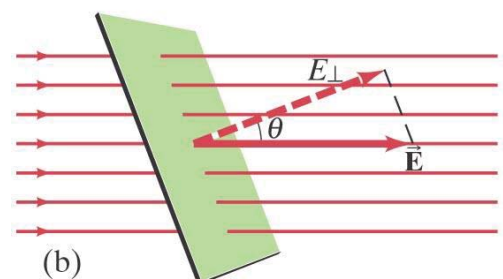
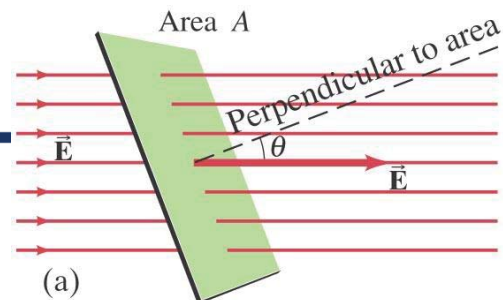
- Electric flux is the number of Electric field lines penetrating a surface or an area.
- The number of field lines per unit of area is constant.
- The flux,  $\Phi$ , is defined as the product of the field magnitude by the area crossed by the field lines.
- $\Phi = EA$



- If the surface is not perpendicular to the field, the expression of the field becomes:
- $\Phi = E A \cos \theta$
- Where  $\theta$  is the angle between the field and a normal to the surface.



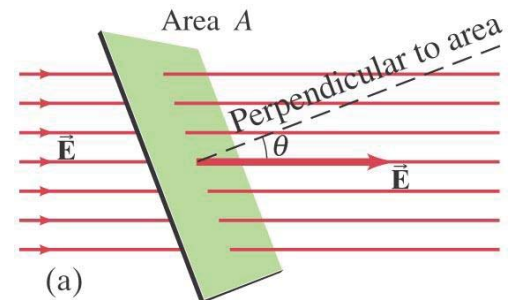
- (a) A uniform electric field  $\mathbf{E}$  passing through a flat area  $A$ .
- (b)  $E_{\perp} = E \cos \theta$  is the component of  $\mathbf{E}$  perpendicular to the plane of area  $A$ .
- (c)  $A_{\perp} = A \cos \theta$  is the projection (dashed) of the area  $A$  perpendicular to the field  $\mathbf{E}$ .



$$[\Phi_E] = [E][A] = \left[ \frac{N}{C} \right] [m^2] \quad \text{as } E = \frac{F}{Q}$$

# Example 01

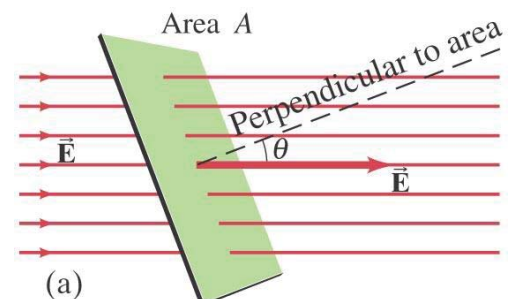
- Calculate the electric flux through the rectangle shown. The rectangle is 10 cm by 20 cm, the electric field is uniform at 200 N/C, and the angle  $\theta$  is  $30^\circ$ .



◦

Dr. Ahmed ElShafee, ACU : Spring 2015, Physics II

- $\Phi = E A \cos \theta$
- $\Phi = 200 \times 0.2 \times 0.1 \times \cos 30 = 3.46 \text{ N}\cdot\text{m}^2/\text{C}.$



7

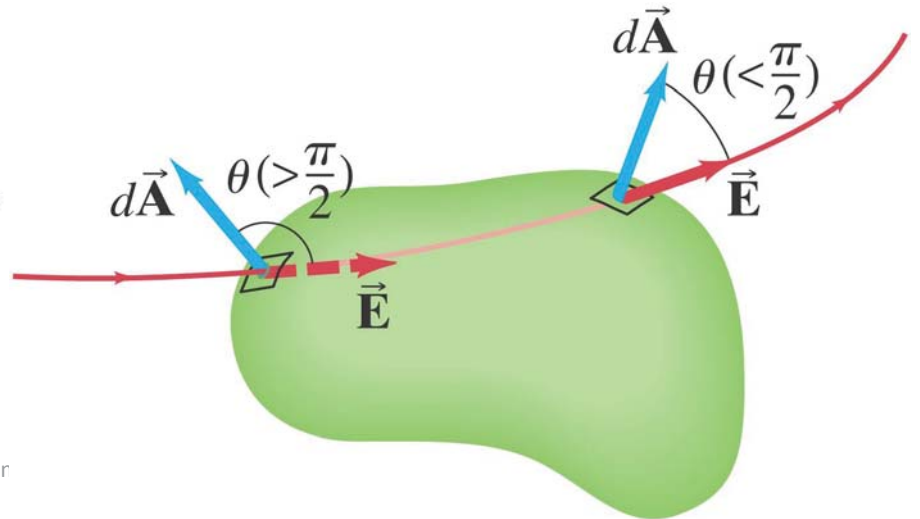
Dr. Ahmed ElShafee, ACU : Spring 2015, Physics II

# Gauss's Law

- The net number of field lines through the surface is proportional to the charge enclosed, and also to the flux,

$$\Phi_E \approx \sum_{i=1}^n \vec{E}_i \cdot \Delta \vec{A}_i.$$

$$\Phi_E \approx \oint \vec{E} \cdot d\vec{A}.$$

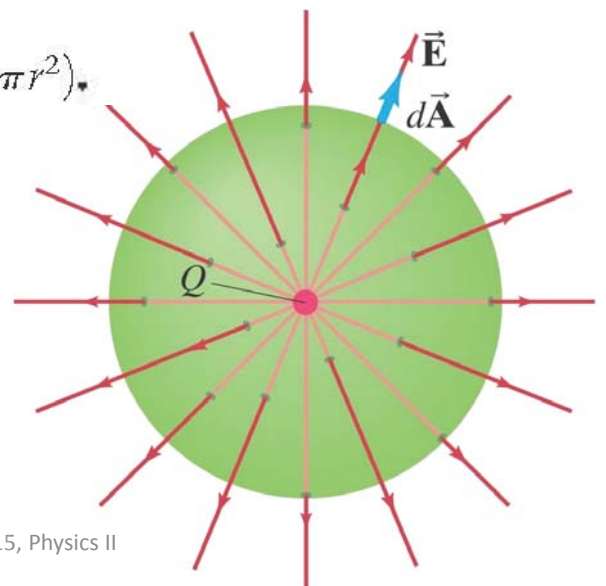


v

Dr. Ahr

- A single point charge  $Q$  at the center of an imaginary sphere of radius  $r$  (our "gaussian surface"—that is, the closed surface we choose to use for applying Gauss's law in this case).
- For a point charge,

$$\Phi_E = \oint E dA = E \oint dA = E(4\pi r^2).$$



Λ

Dr. Ahmed ElShafee, ACU : Spring 2015, Physics II

- From columns low

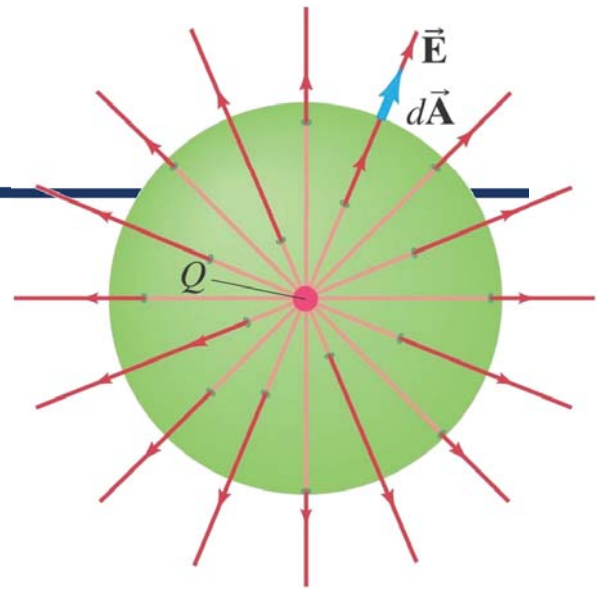
$$F = \frac{k q_1 q_2}{r^2} = \frac{q_1 q_2}{4 \pi \epsilon_0 r^2}$$

$$\text{But } E = \frac{F}{Q}$$

$$E = \frac{Q}{4 \pi \epsilon_0 r^2}$$

$$\Phi = \oint E dA = E \oint dA$$

$$= E 4 \pi r^2 = \frac{k Q_{encl}}{r^2} 4 \pi r^2 = \frac{Q_{encl}}{4 \pi \epsilon_0} 4 \pi = \frac{Q_{encl}}{\epsilon_0}$$



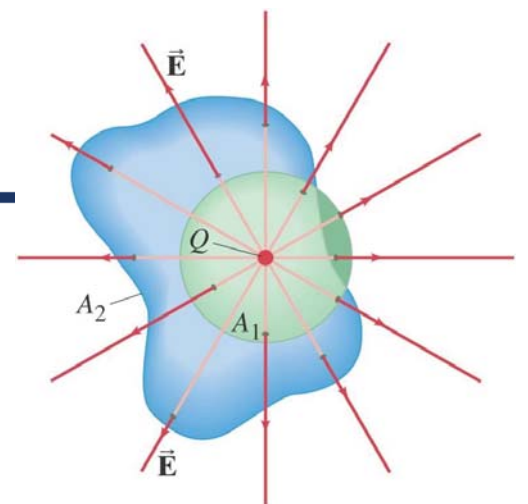
9

Dr. Ahmed ElShafee, ACU : Spring 2015, Physics II

- Using Coulomb's law to evaluate the integral of the field of a point charge over the surface of a sphere surrounding the charge gives:

$$\Phi = \oint E dA = \frac{Q_{encl}}{\epsilon_0}$$

- Looking at the arbitrarily shaped surface  $A_2$ , we see that the same flux passes through it as passes through  $A_1$ . Therefore, this result should be valid for any closed surface.



A single point charge surrounded by a spherical surface,  $A_1$ , and an irregular surface,  $A_2$ .

10

Dr. Ahmed ElShafee, ACU : Spring 2015, Physics II

- Finally, if a gaussian surface encloses several point charges, the superposition principle shows that:

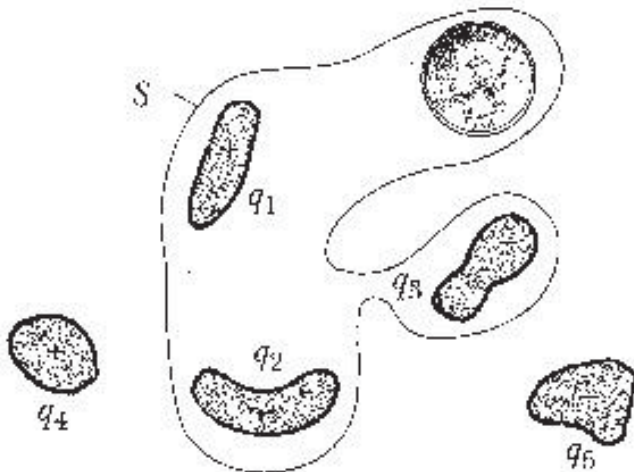
$$\Phi = \oint E dA = \frac{Q_{encl}}{\epsilon_0}$$

- Therefore, Gauss's law is valid for any charge distribution.
- Note, however, that it only refers to the field due to charges within the gaussian surface – charges outside the surface will also create fields.

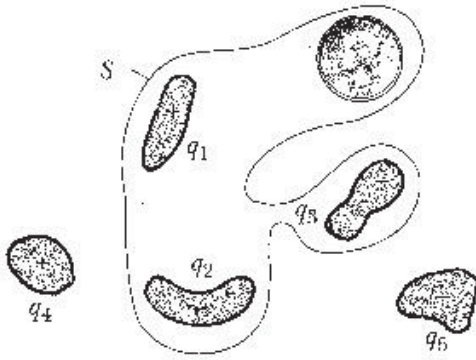
## Example 02

- The figure shows five charged bodies of plastic and an electrically neutral coin as well as a Gaussian surface S. What is the flux through S if the charges are:?

$$q_1 = q_4 = +3.1nC, q_2 = q_5 = -5.9nC, q_3 = -3.1nC$$



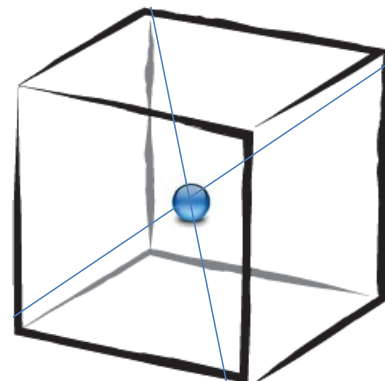
- $q_1 = q_4 = +3.1 \text{ nC}, q_2 = q_5 = -5.9 \text{ nC}, q_3 = -3.1 \text{ nC}$



$$\begin{aligned}
 \Phi &= \oint_S E dA = \frac{q_{\text{encl}}}{\epsilon_0} \\
 &= \frac{q_1 + q_2 + q_3}{\epsilon_0} \\
 &= \frac{(3.1 - 5.9 - 3.1) \times 10^{-9}}{8.55 \times 10^{-12}} \\
 &= -667 \text{ N}\cdot\text{m}^2/\text{C}
 \end{aligned}$$

## Example 03

- A charge of  $1.8 \text{ nC}$  is placed at the center of a cube  $3 \text{ cm}$  on an edge. What is the electric flux through each face?

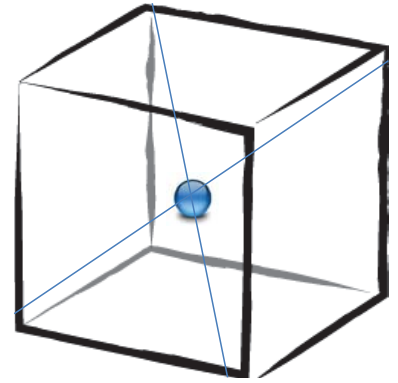


$$\Phi_{cube} = \oint_{cube} E dA = 6 \oint_{Face} E dA = \frac{q_{encl}}{\epsilon_0}$$

$$\oint_{Face} E dA = \frac{q_{encl}}{6 \epsilon_0}$$

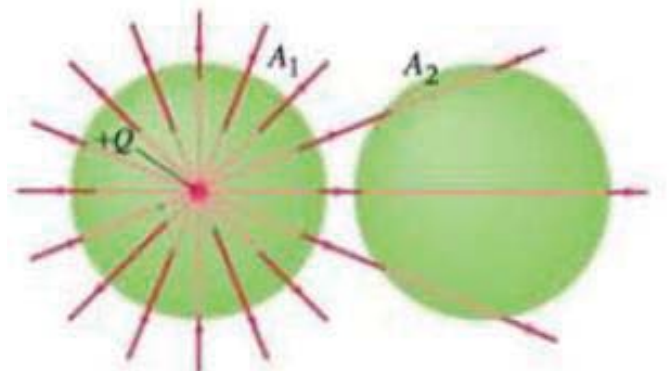
$$= \frac{1.8 \times 10^{-9}}{6 \times 8.85 \times 10^{-12}}$$

$$= 34 \text{ N.m}^2/\text{C}$$



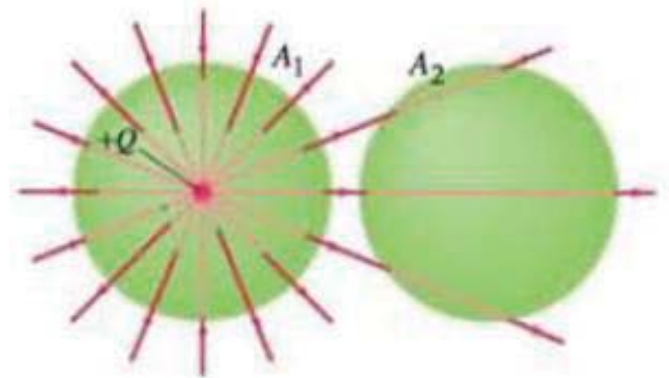
## Example 04

- Consider the two gaussian surfaces, A1 and A2 , shown in Fig
- The only charge present is the charge Q at the center of surface A1
- What is the net flux through each surface, A1 and A2?



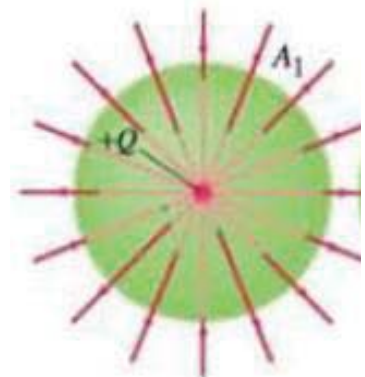


- the net flux through A1 is then
- $\Phi = \int E dA = \frac{Q_{encl}}{\epsilon_0} = Q/\epsilon_0$
- Surface A2 encloses zero net charge, so the net electric flux through A2 is zero



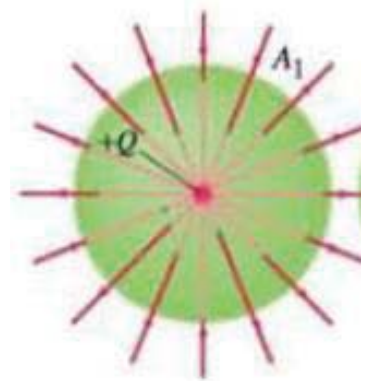
## MCQ

- A point charge  $Q$  is at the center of a spherical gaussian surface  $A$ . When a second charge  $Q$  is placed just outside  $A$ , the total flux through this spherical surface  $A$  is
- (a) unchanged,
- (b) doubled.
- (c) halved,
- (d) none of these.



# MCQ

- A point charge  $Q$  is at the center of a spherical gaussian surface  $A$ . When a second charge  $Q$  is placed just outside  $A$ , the total flux through this spherical surface  $A$  is
- (a) unchanged,
- (b) doubled.
- (c) halved,
- (d) none of these.

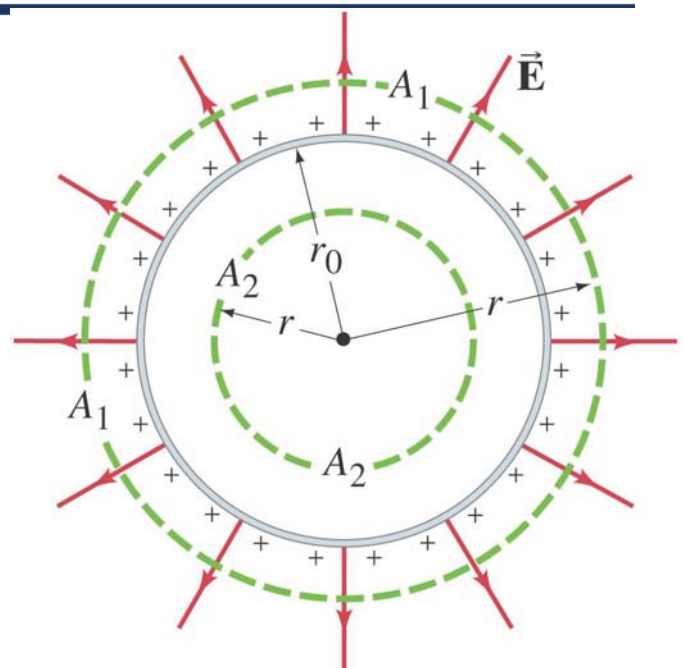


١٩

Dr. Ahmed ElShafee, ACU : Spring 2015, Physics II

## Example 05

- Cross-sectional drawing of a thin spherical shell of radius  $r_0$  carrying a net charge  $Q$  uniformly distributed.  $A_1$  and  $A_2$  represent two gaussian surfaces
- Determine the electric field at points
- (a) outside the shell, and
- (b) within the shell.
- (c) What if the conductor were a solid sphere?



٢٠

Dr. Ahmed ElShafee, ACU : Spring 2015, Physics II

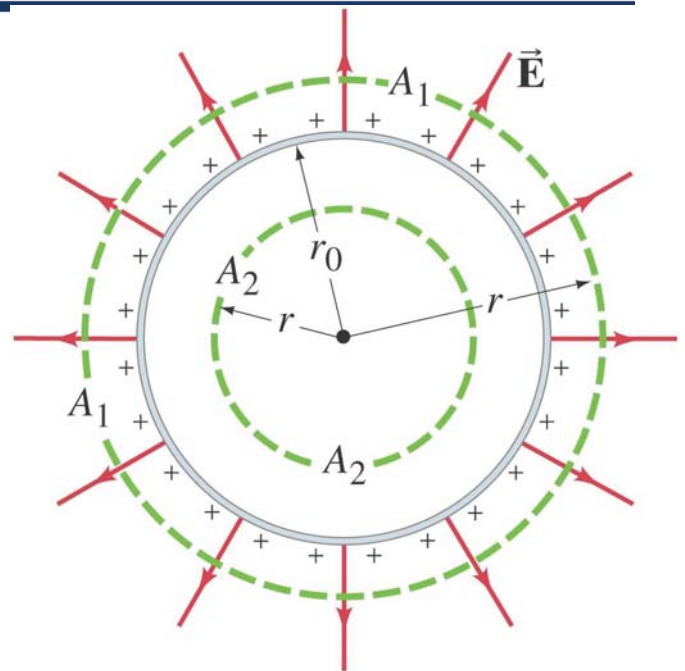
- a. The gaussian surface  $A_1$ , outside the shell, encloses the charge  $Q$ . We know the field must be radial, so

- $\phi = \oint_{A_1} E dA = \frac{Q_{encl}}{\epsilon_0}$

- $E 4 \pi r_1^2 = \frac{Q_{encl}}{\epsilon_0}$

- $E = \frac{Q_{encl}}{4 \pi r_1^2 \epsilon_0}$

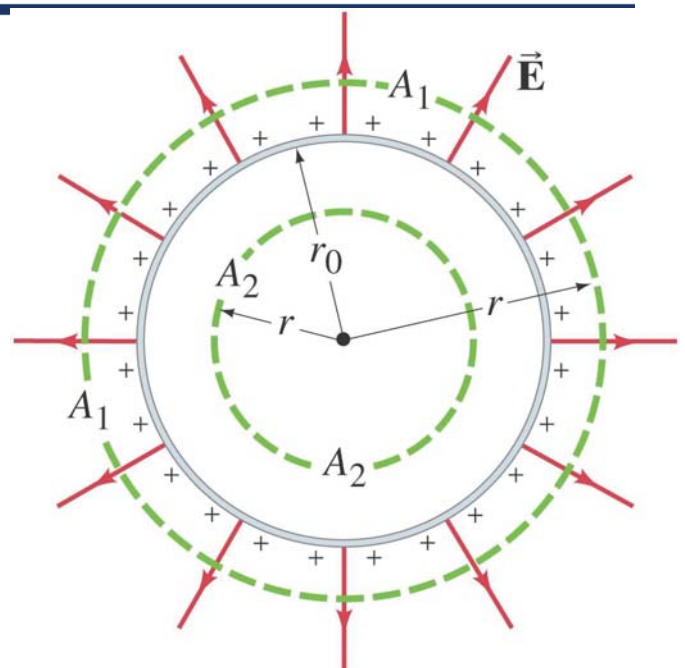
- b. The gaussian surface  $A_2$ , inside the shell, encloses no charge; therefore the field must be zero.



٢١ Dr. Ahmed ElShafee, ACU : Spring 2015, Physics II

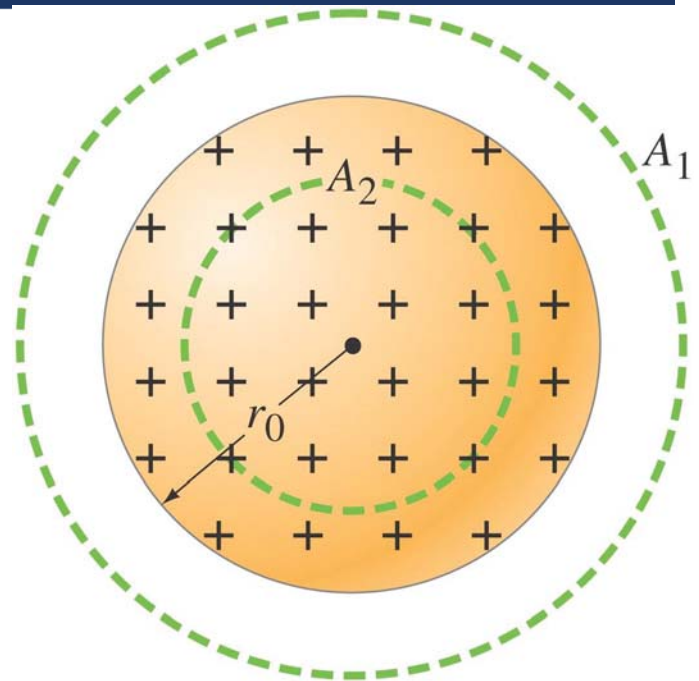
- c. All the excess charge on a conductor resides on its surface, so these answers hold for a solid sphere as well.

- $E = \frac{Q_{encl}}{4 \pi r_0^2 \epsilon_0}$



# Example 06

- Solid sphere of charge.
- An electric charge  $Q$  is distributed uniformly throughout a nonconducting sphere of radius  $r_0$ .
- Determine the electric field
- (a) outside the sphere ( $r > r_0$ ) and
- (b) inside the sphere ( $r < r_0$ ).



٢٣

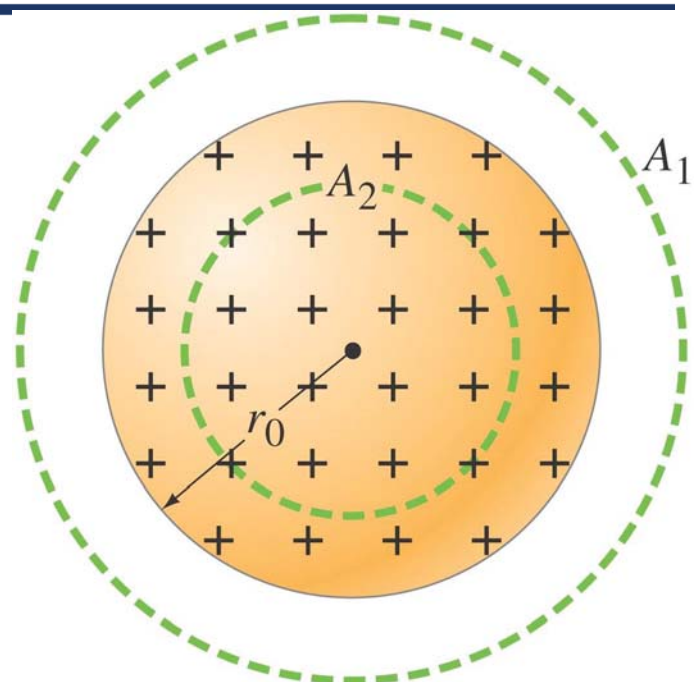
Dr. Ahmed ElShafee, ACU : Spring 2015, Physics II

- a. Outside the sphere, a gaussian surface encloses the total charge  $Q$ . Therefore,

$$\bullet \quad \Phi = \oint_{A_1} E dA = \frac{Q_{encl}}{\epsilon_0}$$

$$\bullet \quad E 4 \pi r^2 = \frac{Q_{encl}}{\epsilon_0}$$

$$\bullet \quad E = \frac{Q_{encl}}{4 \pi r^2 \epsilon_0}$$



٢٤

Dr. Ahmed ElShafee, ACU : Spring 2015, Physics II

- b. Within the sphere, a spherical gaussian surface encloses a fraction of the charge

$$\Phi = \oint_{A_2} E dA = \frac{Q_{encl A_2}}{\epsilon_0}$$

$$E 4 \pi r^2 = \frac{Q_{encl A_2}}{\epsilon_0}$$

$$\rho = \frac{dQ}{dV}$$

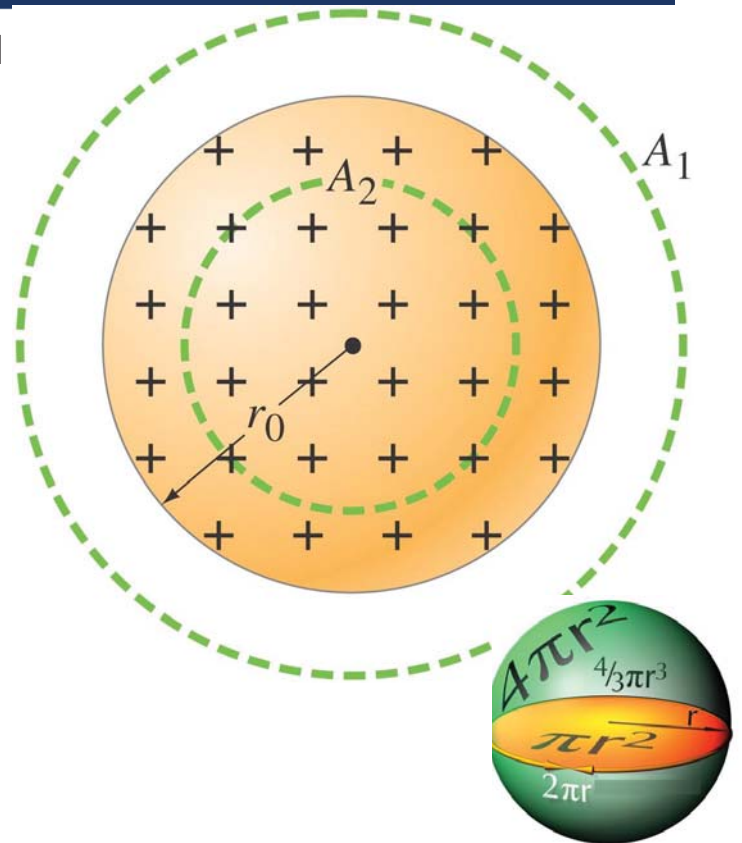
$$Q = \int_0^{r_0} \rho dV = \rho \frac{4}{3} \pi r_0^3$$

$$Q_{encl A_2} = \int_0^r \rho dV = \rho \frac{4}{3} \pi r^3$$

$$Q_{encl A_2} = Q \frac{r^3}{r_0^3}$$

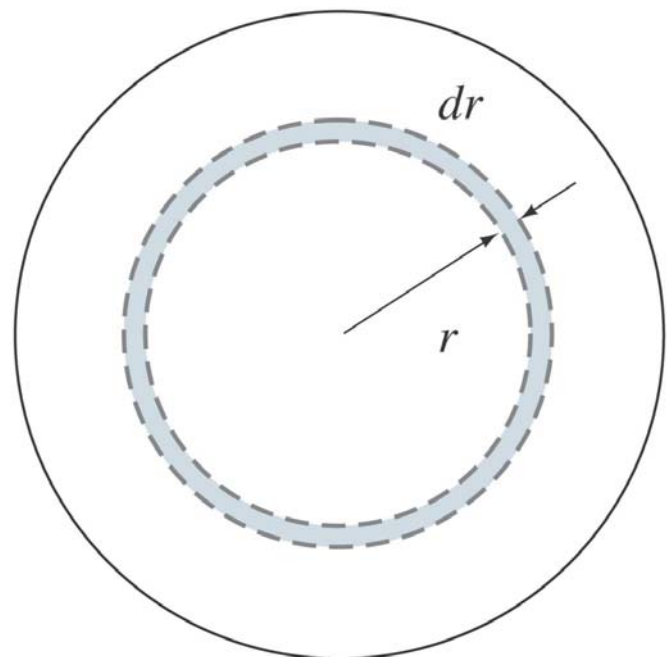
$$E = \frac{Q r^3}{4 \pi r^2 \epsilon_0 r_0^3} = \frac{Q r}{4 \pi \epsilon_0 r_0^3}$$

٢٥



## Example 07

- Nonuniformly charged solid sphere.
- Suppose the charge density of a solid sphere is given by  $\rho_E = \alpha r^2$ , where  $\alpha$  is a constant.
- (a) Find  $\alpha$  in terms of the total charge  $Q$  on the sphere and its radius  $r_0$ .
- (b) Find the electric field as a function of  $r$  inside the sphere.



٢٦

- a. Consider the sphere to be made of a series of spherical shells, each of radius  $r$  and thickness  $dr$ . The volume of each is

- $dV = 4 \pi r^2 dr$

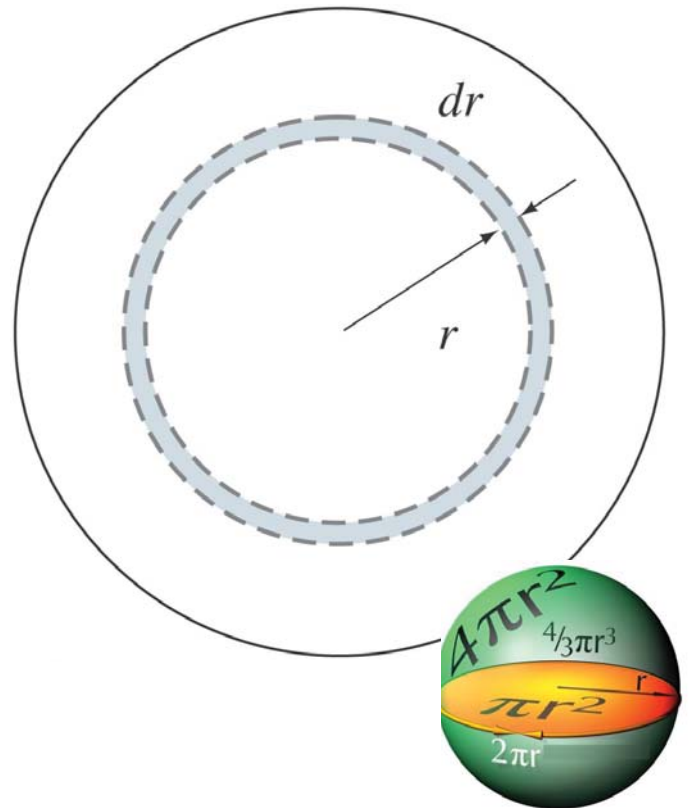
- To find the total charge:

- $dQ = \rho dV = 4 \pi \rho r^2 dr$

- $dQ = 4 \pi \alpha r^4 dr$

- $Q = 4 \pi \alpha \int_0^{r_0} r^4 dr$   
 $= \frac{4}{5} \pi \alpha r_0^5$

- $\alpha = \frac{5}{4 \pi Q r_0^5}$



- as  $Q = \frac{4}{5} \pi \alpha r_0^5$

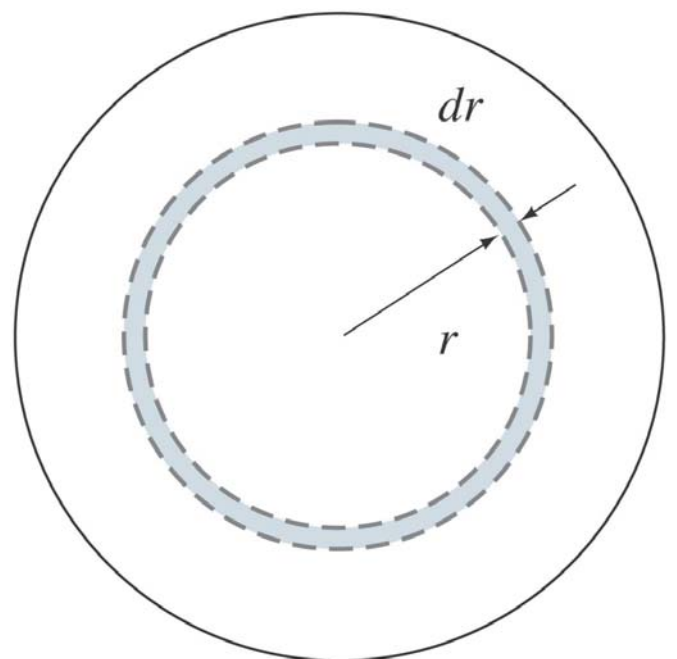
- as:  $Q_{encl} = \frac{4}{5} \pi \alpha r^5$

- $Q_{encl} = \frac{r^5}{r_0^5} Q$

- $\Phi = \oint E dA = \frac{Q_{encl}}{\epsilon_0}$

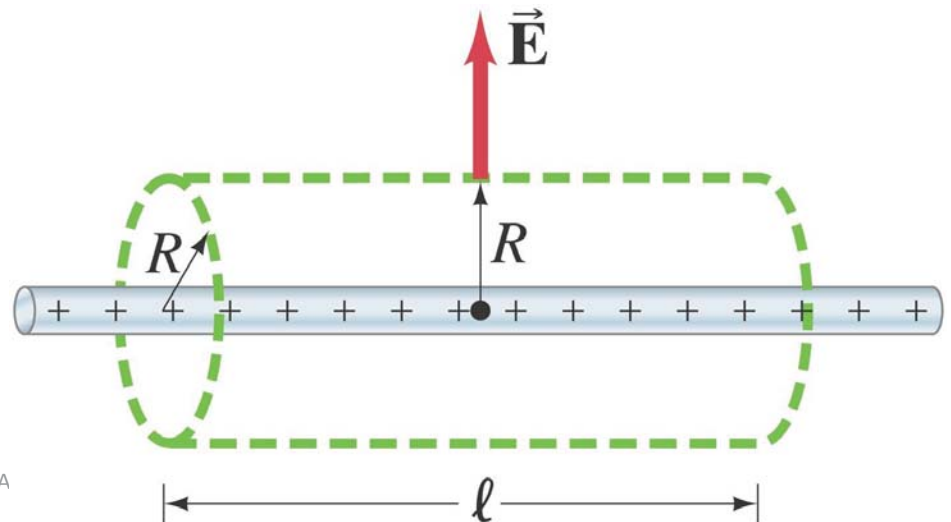
- $E 4\pi r^2 = \frac{r^5}{r_0^5 \epsilon_0} Q$

- $E = \frac{Q r^3}{4 \pi r_0^5 \epsilon_0}$



# Example 08

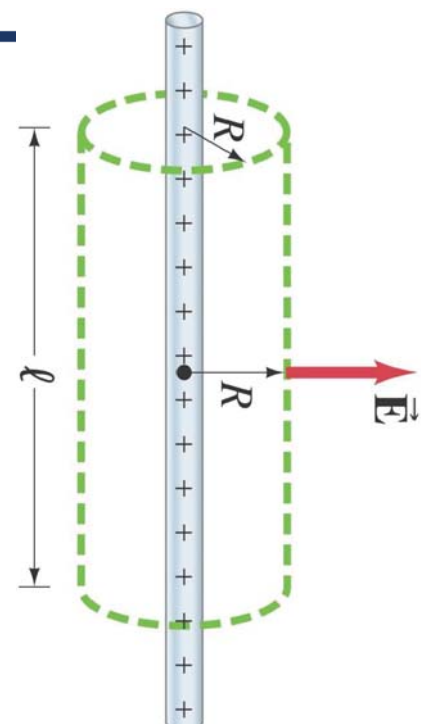
- Long uniform line of charge.
- A very long straight wire possesses a uniform positive charge per unit length,  $\lambda$ . Calculate the electric field at points near (but outside) the wire, far from the ends.



٢٩

Dr. A

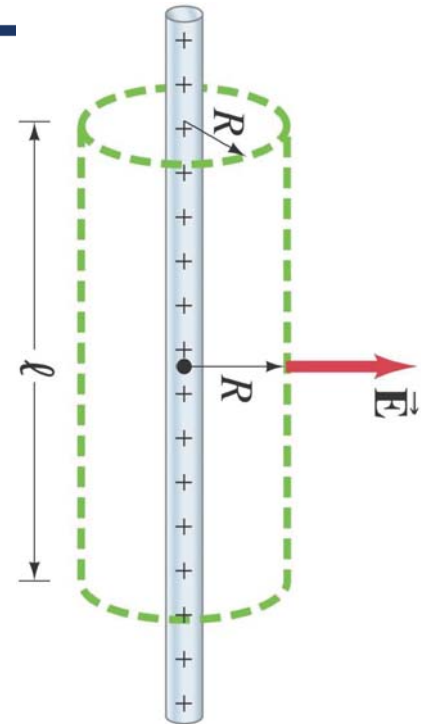
- If the wire is essentially infinite, it has cylindrical symmetry and we expect the field to be perpendicular to the wire everywhere
- Therefore, a cylindrical gaussian surface will allow the easiest calculation of the field.
- The field is parallel to the ends and constant over the curved surface; integrating over the curved surface



٣٠

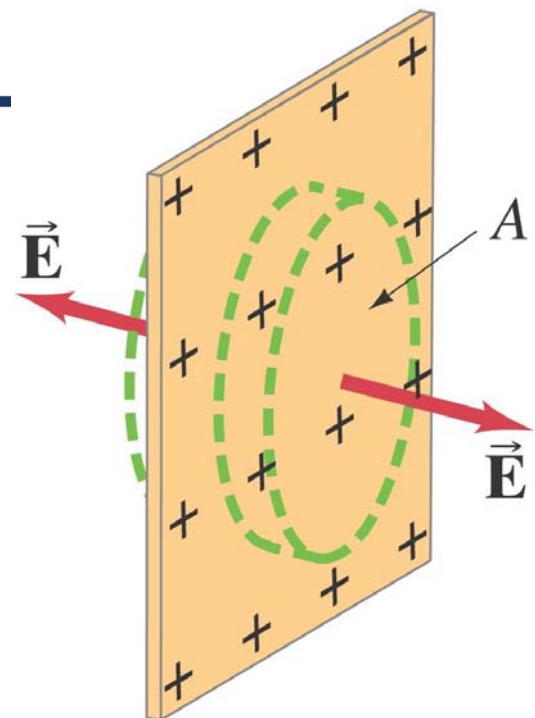
Dr. Ahmed ElShafee, ACU : Spring 2015, Physics II

- $\Phi = \oint E dA = \frac{Q_{encl}}{\epsilon_0}$
- For a cylinder  $A = 2 \pi R l$
- And  $Q_{encl} = \lambda l$
- $E 2 \pi R l = \frac{\lambda l}{\epsilon_0}$
- $E = \frac{\lambda}{2 \pi R \epsilon_0}$



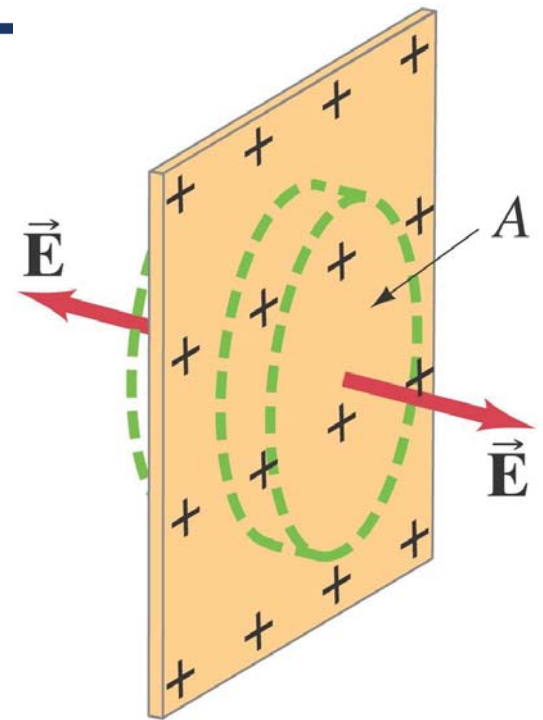
## Example 09

- Infinite plane of charge.
- Charge is distributed uniformly, with a surface charge density  $\sigma$  ( $\sigma = \text{charge per unit area} = dQ/dA$ ) over a very large but very thin nonconducting flat plane surface.
- Determine the electric field at points near the plane.





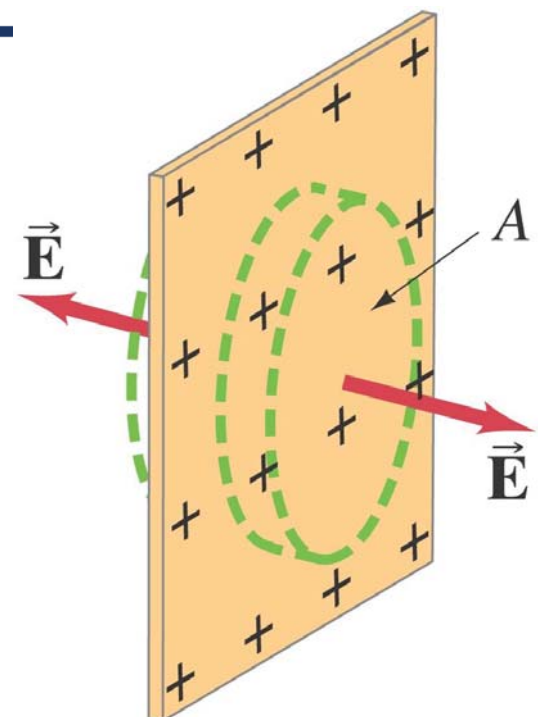
- We expect  $E$  to be perpendicular to the plane, and choose a cylindrical gaussian surface with its flat sides parallel to the plane.
- The field is parallel to the curved side; integrating over the flat sides



٣٣

Dr. Ahmed ElShafee, ACU : Spring 2015, Physics II

- $\Phi = \oint E dA = \frac{Q_{encl}}{\epsilon_0}$
- $Q_{encl} = \sigma A$
- $2 E A = \frac{\sigma A}{\epsilon_0}$
- $E = \frac{\sigma}{2 \epsilon_0}$



٣٤

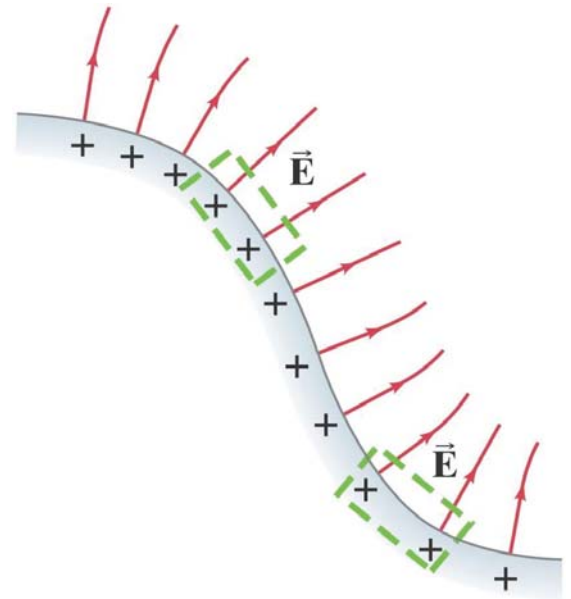
Dr. Ahmed ElShafee, ACU : Spring 2015, Physics II

# Example 10

- Electric field near any conducting surface.
- Show that the electric field just outside the surface of any good conductor of arbitrary shape is given by

$$E = \sigma/\epsilon_0$$

- where  $\sigma$  is the surface charge density on the conductor's surface at that point.



٣٥

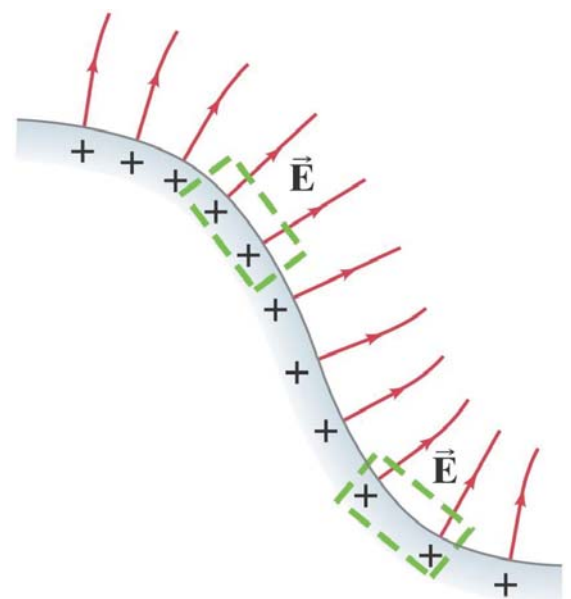
Dr. Ahmed ElShafee, ACU : Spring 2015, Physics II

- Again we choose a cylindrical gaussian surface.
- Now, however, the field inside the conductor is zero, so we only have a nonzero integral over one surface of the cylinder.

$$\phi = \oint E dA = \frac{Q_{encl}}{\epsilon_0}$$

$$E A = \frac{\sigma A}{\epsilon_0}$$

$$E = \frac{\sigma}{\epsilon_0}$$

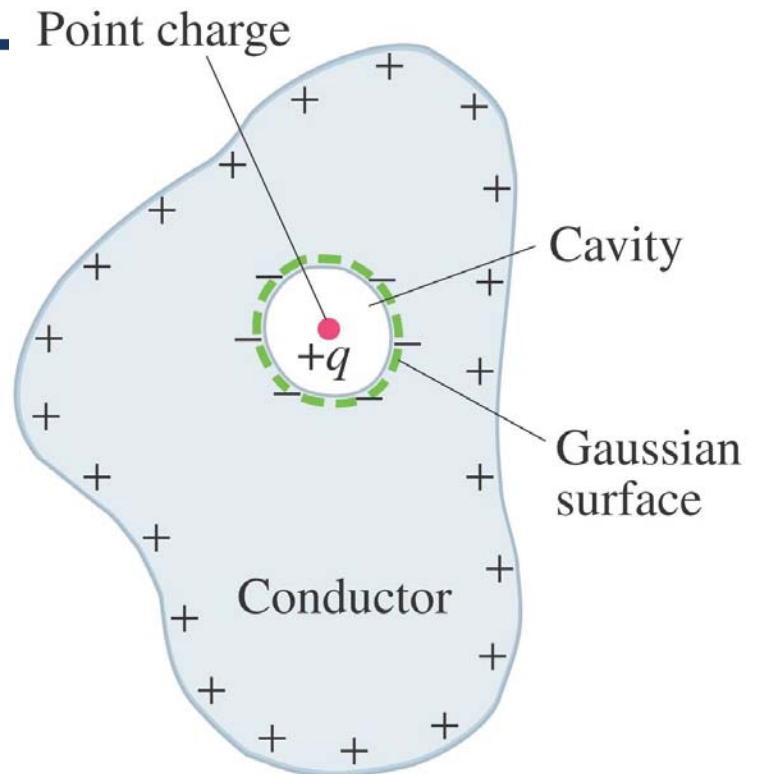


٣٦

Dr. Ahmed ElShafee, ACU : Spring 2015, Physics II

# Example 11

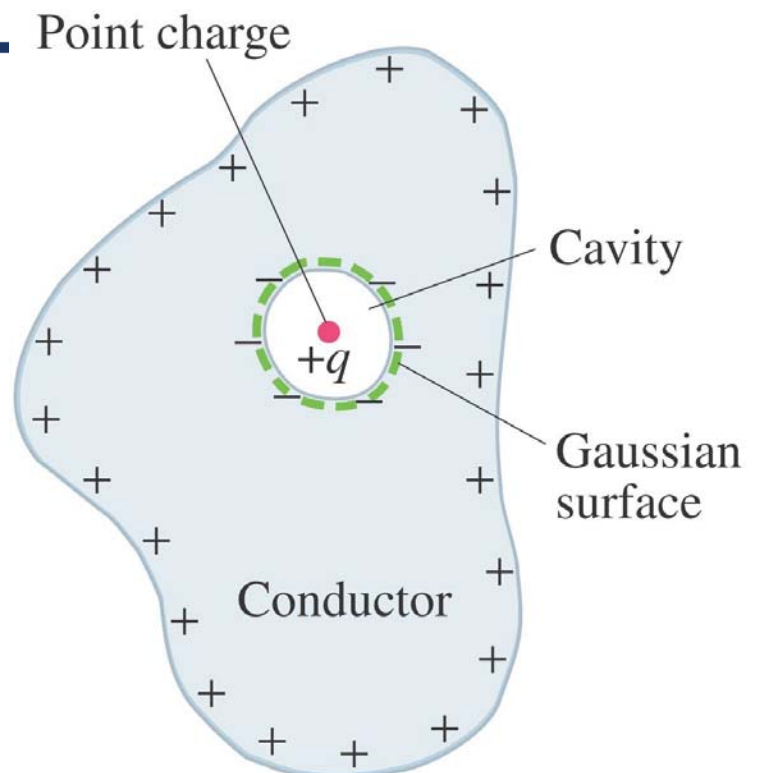
- Conductor with charge inside a cavity.
- Suppose a conductor carries a net charge  $+Q$  and contains a cavity, inside of which resides a point charge  $+q$ .
- What can you say about the charges on the inner and outer surfaces of the conductor?



٣٧

Dr. Ahmed ElShafee, ACU : Spring 2015, Physics II

- The field must be zero within the conductor, so the inner surface of the cavity must have an induced charge totaling  $-q$  (so that a gaussian surface just around the cavity encloses no charge).
- The charge  $+Q$  resides on the outer surface of the conductor.



٣٨

Dr. Ahmed ElShafee, ACU : Spring 2015, Physics II

- 
- **Electric flux:**

$$\Phi_E = \int \vec{E} \cdot d\vec{A}.$$

- **Gauss's law:**

$$\oint \vec{E} \cdot d\vec{A} = \frac{Q_{\text{encl}}}{\epsilon_0}.$$

- **Gauss's law can be used to calculate the field in situations with a high degree of symmetry.**
- **Gauss's law applies in all situations.**



Thanks,..

See you next week (ISA),...